



ANANDALAYA

Weekly Test 3

Class : III

Subject : MATHEMATICS

Date : 08/03/2016

M.M : 25

Time : 1 Hour

Name : _____

Section: _____

Roll No. : _____

1. Fill in the boxes:

4

a) In the fraction $\frac{3}{7}$, is the numerator.

b) In a pizza , if 2 out of 6 parts are eaten then fraction of the pizza

left is .

c) 1 Kg = g.

d) 1 m = cm.

e) 1 li = ml + 500 ml.

f) The time is 4 :15 now . 3 hours ago the time was .

g) Two 50 paise coins is same as rupee .

h) The hour hand takes rounds of the clock in 1 day.

2. Answer the following questions :

3

a) Draw 21 balls. Find $\frac{1}{3}$ of them and colour them red.

b) Find $\frac{1}{4}$ of 32 cakes.

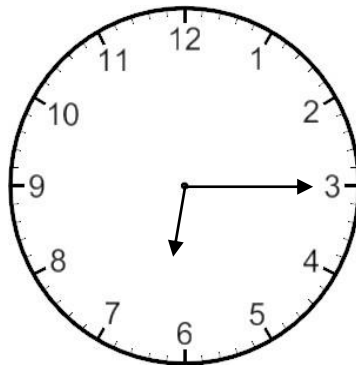
3. Convert into centimetre:
a) 6m 4cm

2

b) 8m

4. Razia went to see a movie. The movie began at the time shown in the clock below.

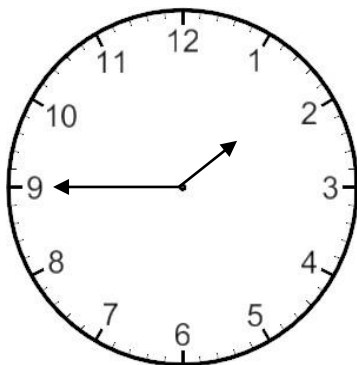
1



The movie was 2 hours long. At what time the movie gets over?

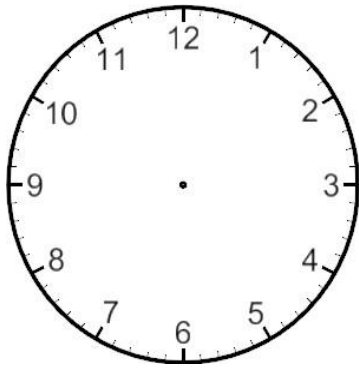
5. Write the time shown in the clock given below in 4 different ways.

2

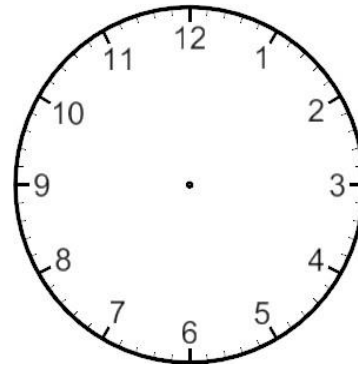


6. Draw the arms of the clock according to the given time : 2

a) 55 minutes past 4



b) Quarter past 10



7. Solve : 1

a) If 1 laptop weighs 4 Kg. How much will 3 laptops weigh?

b) Aruna bought a cake for Rupees 32.50. She gave the shopkeeper 2

Rupees 50 . How much money did the shopkeeper return?

8. Write "True" or "False". If False correct it. 2

a) One fourth of 40 = 14 . ()

b)The denominator of the fraction $\frac{7}{12}$ is 12. ()

c) 40 minutes past 2 is same as 4:20. ()

9.

| |
|--------------------|
| ANAND FRUIT BAZAAR |
|--------------------|

4

Mrs Sharma bought some fruits from the Anand Fruit Bazaar.

Prices of 1 Kg of each item is given.

Find the cost of each item that Mrs Sharma bought.

She bought –

2Kg Grapes

1/3 Kg chikkoos

1/2 Kg Apples

And 4 Kg Papayas.