



ANANDALAYA  
Weekly Test III  
Class : I

Subject: MATHEMATICS  
Date : 23/02/2016

M.M: 20  
Time: 1 Hour

Name: \_\_\_\_\_

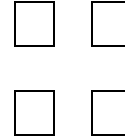

Section: \_\_\_\_\_

Roll No: \_\_\_\_\_

1. Write the number name for:

3

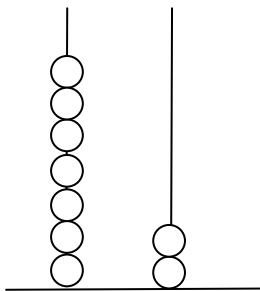
a)



b)



c)



T O

2. Add: 3
- a)  $45 + 23$                       b)  $60 + 29$                       c)  $37 + 52$

3. The sentences given below are wrong. Write the correct answer in the bracket. 3

a) The number just after 89 is 88. (\_\_\_\_\_)

b) 6 tens = 6 (\_\_\_\_\_)

c) The number just before 70 is 71. (\_\_\_\_\_)

d) 9 tens 3 ones = 39 (\_\_\_\_\_)

e) 1 more than 8 ones is 7. (\_\_\_\_\_)

f)  $12 + 5 = 15$  (\_\_\_\_\_)

4. Look at the numbers on the rabbits. Arrange the numbers from big to small. 1



5. Put  $>$ ,  $<$  or  $=$  in the box. 3

a) 8 tens 5 ones    

5 tens 8 ones

b) 9 tens            


The number just after 89

c) 7 ones            


6tens 7 ones

6. Write the correct answer in the box. 2


a)




b)






c)



d)



7. Look at the picture and write the multiplication fact and also write the total number of toffees. 1



\_\_\_\_\_ × \_\_\_\_\_ = \_\_\_\_\_

8. Fill in the blanks: 2

a)  $8 \times 1 =$  \_\_\_\_\_

b)  $12 \times 0 =$  \_\_\_\_\_

c)  $7 \times 10 =$  \_\_\_\_\_

d)  $2 \times 2 =$  \_\_\_\_\_

9. In a flower pot there are 2

35



23



How many flowers are there altogether in the pot?