



ANANDALAYA

Weekly Test 2

Class : I

Subject: MATHEMATICS

Date : 27/10/2015

M.M: 20

Time: 1 Hour

Name: _____

Section: _____

Roll No: _____

1. Fill in the blanks:

3

a) 1 more than 16 is _____.

b) 1 less than 20 is _____ .

c) $6 + \square = 7$

d) $9 + \square = 9$

e) $4 + 3 = \square + 4$

f) _____ shape has no sides .

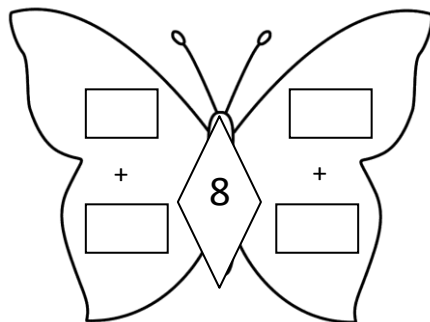
2. Ring the pair of numbers that add upto 20 :

2

19	13	18	2
1	8	20	0
17	10	10	15
4	6	2	1

3. Make two addition facts of 8 :

1



4. Add the following numbers: 2

a)
$$\begin{array}{r} \text{T O} \\ 35 \\ + 2 \\ \hline \\ \hline \end{array}$$

b)
$$\begin{array}{r} \text{T O} \\ 23 \\ + 14 \\ \hline \\ \hline \end{array}$$




5. Subtract the following numbers: 2

a)
$$\begin{array}{r} \text{T O} \\ 36 \\ - 20 \\ \hline \\ \hline \end{array}$$

b)
$$\begin{array}{r} \text{T O} \\ 47 \\ - 21 \\ \hline \\ \hline \end{array}$$

6. Look at the picture carefully and fill in the table given below. 3

- a) Write the names of the shapes.
- b) Count the number of shapes and write in the box.

Shape	Name of the shape	How many ?
		
		
		

7. Solve:

2

a) 9 birds on the tree

3 flew away

How many birds are left ?

birds are left .

b) Raja has 7 marbles

He won 5 more marbles

How many marbles in all ?

Raja has marbles in all .

8. There are 10 apples in the basket. Put some more apples in the basket to make it equal to 15.

1

I kept apples in the basket.

10 5 = 15 (Put + or - in the box)

9. Join the birds to their correct nest :

4

